
















## Übungen im Rechnen.

1.	2.	3.
	 	  
4.	$1 + 1 = 2$	$1 + 1 + 1 = 3$
	$2 - 1 = 1$	$1 + 2 = 3$
 	$2 - 1 - 1 = 0$	$2 + 1 = 3$
	$2 \times 1 = 2$	$3 - 1 = 2$
$1 + 1 + 1 + 1 = 4$	$1 \times 2 = 2$	$3 - 1 - 1 = 1$
$1 + 3 = 4 \text{ z.}$	$2 : 1 = 2$	$3 - 1 - 1 - 1 = 0$
$4 - 1 = 3$	$2 : 2 = 1$	$3 - 2 = 1$
$4 - 1 - 1 = 2 \text{ z.}$		$3 - 3 = 0$
$4 \times 1 = 4 \text{ z.}$		$3 \times 1 = 3$
$4 : 1 = 4$		$1 \times 1 + 2 = 3$
$4 : 2 = 2 \text{ z.}$		$1 \times 2 + 1 = 3$
		$1 \times 3 = 3$
		$3 : 1 = 3$
		$3 : 2 = 1 + 1$
		$3 : 3 = 1$

5.

6.

